



GVN

THE GLOBAL SCHOOL

Sector C, BHEL, Govindpura, Bhopal
Affiliated to CBSE (Affiliation No.: 1030723)



CLASS - IV

SESSION

2025-26





A. Types of sentences There are four types of sentences:

1. Declarative – makes a statement. Example: I like pizza.
2. Interrogative – asks a question. Example: Do you like pizza?
3. Imperative – gives a command or request. Example: Please pass the pizza.
4. Exclamatory – shows strong emotion. Example: I love pizza!

Identify the sentence type

A. Write whether the sentence is Declarative (D), Interrogative (I), Imperative (Im), or Exclamatory (E).

1. Can we go to the park today? _____
2. Watch out for the car! _____
3. I am reading a book. _____
4. Please close the door. _____
5. What time is dinner? _____
6. That was amazing! _____

B. Choose the correct question word (What, Where, Who, When, Why, How) Fill in the blanks with the correct question word.

1. _____ is your name?
2. _____ do you live?
3. _____ is your best friend?
4. _____ do birds fly?
5. _____ do you go to school?
6. _____ old are you?



Make a colourful chart showing Roman numbers.

Or

Make a colourful chart showing comparison between Indian and International place value system.

WORKSHEET

Q1) Learn and write tables from 11 to 20 in your notebook.

Q2) Write the Hindu Arabic numerals for the Roman numeral:

- a. LXXIII- _____
- b. XCVII- _____
- c. CI- _____
- d. XL- _____
- e. M- _____

Q3) Write the Roman numerals for the following Hindu Arabic numbers:

- a) 80- _____
- b) 91- _____
- c) 74- _____
- d) 55- _____
- e) 62- _____

Q4) Write the place value of the **bold** digits:


- a) **6**4537- _____
- b) **5**48267- _____
- c) 6**0**5386- _____

Q5) Write the number names for the following numerals:

- a) 765402- _____
- b) 3805407- _____
- c) 50075- _____
- d) 84906- _____

Q6) write the smallest and greatest 5 digit number using the following digits:

- a) 6, 5, 0, 2, 7- _____
- b) 4, 7, 9, 2, 3- _____



A. Fill in the blanks:

1. Leaves make food for the plant using sunlight. This process is called _____.
2. The green pigment in leaves is called _____.
3. Plants use _____, water, and sunlight to make food.
4. In cactus, _____ perform the function of leaves.
5. The flat part of a leaf is called the _____.

B. Match the following:

Column-A

1. Photosynthesis
2. Mangrove
3. Cactus
4. Underwater
5. Potato plant

Column B

- a. Desert Plant
- b. Swollen Stem Stores water
- c. Occurs in leaves
- d. Has breathing roots
- e. Long ribbon-like leaves



C. Multiple Choice Questions (MCQ):

1. Which part of the plant prepares food?
a) Root b) Leaf c) Stem d) Flower
2. Which of these is a desert plant?
a) Lotus b) Cactus c) Pine d) Mango
3. The leaves of underwater plants are:
a) Thick and waxy b) Small and pointed c) Long and ribbon-like
d) Broad and flat

D. Answer the following:

1. What is photosynthesis?
2. How do leaves help the plant?
3. Name two plants that grow in water.
4. How is a cactus adapted to live in the desert?
5. Name few non-green plants.

E. Draw and Label:

1. A leaf and its parts (label: blade, midrib, veins, stem)
2. A cactus plant showing spines instead of leaves





QI. Answer in one word.

1. The word globe has been derived from the Latin word
2. India is located in the continent of
3. The number of states in India are
4. Based on area, India's position in the world.....
5. A land surrounded on three sides by water is called a

QII. Write true for correct and false for incorrect statement.

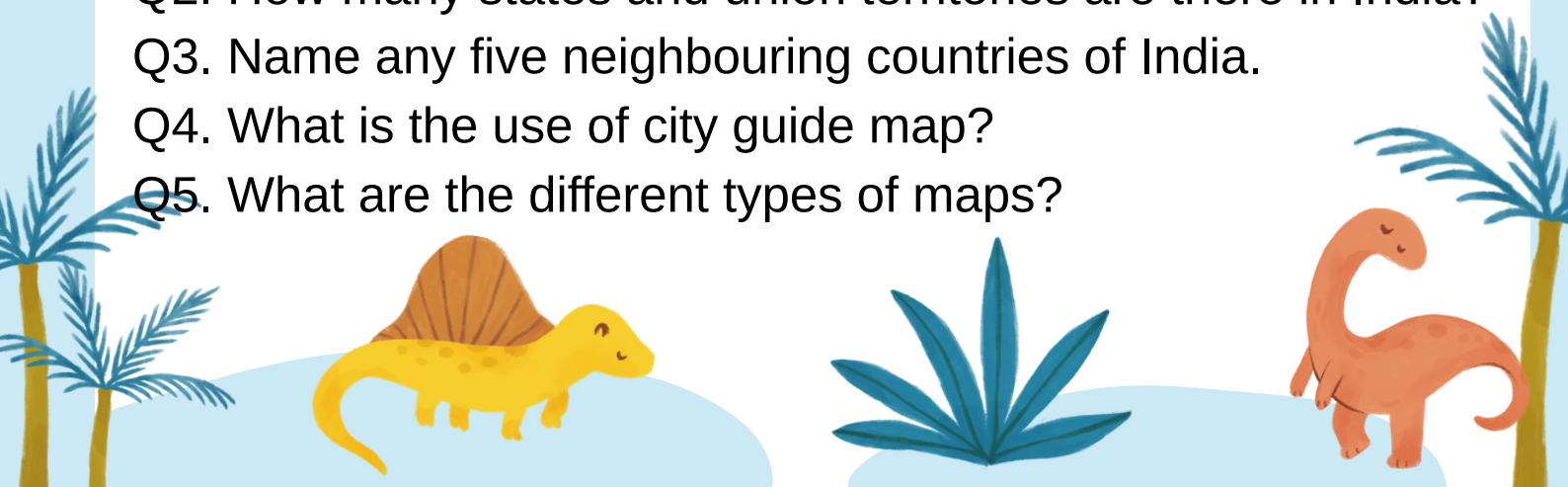
1. A globe has no advantages over a map. _____
2. Five main directions are shown on every map. _____
3. Latitudes are vertical lines on a map. _____
4. There is only one type of map. _____
5. A map is very difficult to be carried along. _____

QIII. Define the following terms.

- a) Map
- b) Plateau
- c) Island
- d) Longitude

QIV. Answer the following questions.

- Q1. What is a globe?
- Q2. How many states and union territories are there in India?
- Q3. Name any five neighbouring countries of India.
- Q4. What is the use of city guide map?
- Q5. What are the different types of maps?



COMPUTER

1. Fill in the blanks:

- a) Windows 10 was developed by_____.
- b) A _____ is a collection of related information.
- c) The _____ icon provides an easy and quick access to a program.
- d) CPU is also known as _____.
- e) CD can store upto _____ data.
- f) A pen drive is also called _____.
- g) Keyboard contains a grid of buttons called - _____
- h) Printer, plotter and speaker is an example of _____.

2. Draw and label any four

- 1. Input devices
 - 2. Output devices
 - 3. Storage devices
3. Define the following:
- 1. File
 - 2. Folder
 - 3. Hard copy



हिन्दी

प्रश्न एक अनेक शब्दों के लिए एक शब्द लिखें :-

कविता लिखने वाला
मूर्तियों को बनाने वाला
जो कठिनाई से मिले
जहां जाना सरल हो
जो देखने योग्य हो

प्रश्न दो निर्देश अनुसार करें -

कोई पांच देशों के नाम -
कोई पांच नदियों के नाम -
कोई पांच फलों के नाम -
कोई पांच मित्रों के नाम -
कोई पांच फूलों के नाम-

प्रश्न 3 दिए गए वर्णों से तीन तीन शब्द बनाएं

म - ____

न- ____

ग- ____



फ- ____

ह- ____

प्रतिदिन एक पेज हिंदी लेखन

सुलेख अभ्यास पुस्तिका में करें ।





Art- page no6(Hippo)

Page no 7(Rabbit)

Page no 27(Yak)

Page no 29(Giraffe)

Page no 41(owl)

Craft- Wall hanging

